

# GWALIOR GLORY SCHOOL

## WINTER HOLIDAY HOMEWORK

### ENGLISH (2024-25)







Class : II

Name : \_\_\_\_\_ Sec. : \_\_\_\_\_ Roll No. : \_\_\_\_\_ Date : \_\_\_\_\_






**(1) FUN RIDDLES: Use the key to break the code.**

A	B	C	D	E	F	G	H	I	J	K	L	M
												
N	O	P	Q	R	S	T	U	V	W	X	Y	Z
												









(i) What gets wet while drying?








(ii) Which five-letter word becomes shorter when you add two letters to it?

(iii) Which word begins and ends with an 'E' but only has one letter?

(iv) What is always in front of you but can't be seen?

(v) The more you take, the more you leave behind. What am I?

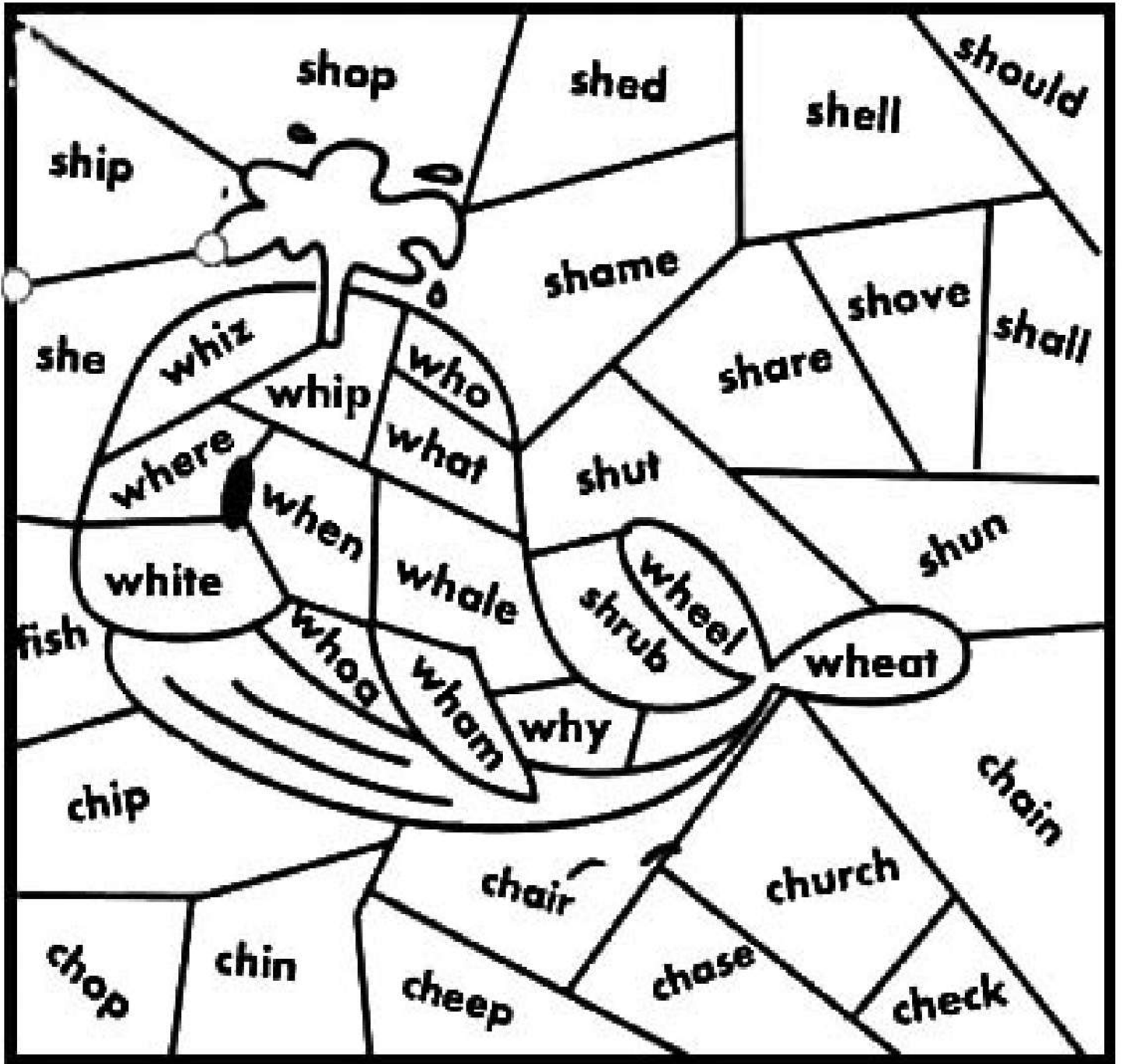
(2) COLOUR THE DIGRAPHS:

**WH – CH – SH SOUNDS**

The picture below has words with wh-ch-sh sounds.

- ◆ Use the code below to colour the words with the correct colour:-

'sh' – sounds **yellow**      'wh' – sounds **green**      'ch' – sounds **blue**




- ◆ Which animal can you see?

\_\_\_\_\_

### (3) Trick-or-treat

“On Halloween night I’m going to be a crocodile – a green and orange crocodile with big yellow eyes”, Ricky laughed. “My mom made my costume for me out of paper, flour paste and water colours. The face has 50 teeth and a fat nose.”

“You may think it will be pretty hard to crawl down the street on my stomach all night. Nope, not for me! I have a new skateboard and I’ll just lie on it and push myself up and down the block for hours. I’ll hang my trick-or-treat bag around my neck and ring everyone’s doorbell with my tail. No one will ever guess that it’s me!”



(1) Ricky was getting ready for:

- (A) a birthday party
- (B) Halloween night
- (C) school

(2) Who made Ricky’s costume?

---

(3) How many teeth did the crocodile have?

---

(4) Where did Ricky hang his trick-or-treat bag?

---

(5) What was Ricky going to do with his tail?

---

(6) Find three colours in the story and write them here.

---

**(4) Anagrams. Give the anagrams of the following. One has been done for you.**

- (1) Change agree into another word of keen eager.
- (2) Change thicken into a place where you cook \_\_\_\_\_
- (3) Change asleep into a polite word \_\_\_\_\_
- (4) Change below into a body part \_\_\_\_\_
- (5) Change thing into a time of day \_\_\_\_\_
- (6) Change heart into a planet \_\_\_\_\_
- (7) Change super into something you keep money in \_\_\_\_\_
- (8) Change swap into an insect \_\_\_\_\_
- (9) Change bleat into a furniture \_\_\_\_\_
- (10) Change handouts into a number \_\_\_\_\_
- (11) Change danger into a place where you grow flowers \_\_\_\_\_
- (12) Change thirst into something you wear \_\_\_\_\_

**(5) Create your own name plate on A-4 size sheet and also write the meaning of your name on it.**

**(6) Do Pg. 55 & Pg. 56 (omit Q.B) of Grammar Book.**

**(7) Cursive book – Do Pg. 38, 39 & 40**

# GWALIOR GLORY SCHOOL

Class : II

WINTER HOLIDAY HOMEWORK

HINDI (2024-25)

Name : \_\_\_\_\_ Sec. : \_\_\_\_\_ Roll No. : \_\_\_\_\_ Date : \_\_\_\_\_

(1) नीचे दिए गए चित्र को ध्यान से देखो और दिखाई गई को चार क्रियाओं पर एक-एक वाक्य लिखो।



(1) \_\_\_\_\_

\_\_\_\_\_

(2) \_\_\_\_\_

\_\_\_\_\_

(3) \_\_\_\_\_

\_\_\_\_\_

(4) \_\_\_\_\_

\_\_\_\_\_

(2) तुकान्त लिखो जिससे शरीर के अंगों के नाम बन जाए।

साथ — हाथ याक — \_\_\_\_\_

फिर — \_\_\_\_\_ धंधा — \_\_\_\_\_

जान — \_\_\_\_\_ समर — \_\_\_\_\_


बिल — \_\_\_\_\_ मलाई — \_\_\_\_\_

सैर — \_\_\_\_\_ लुटना — \_\_\_\_\_

गाथा — \_\_\_\_\_ चाल — \_\_\_\_\_

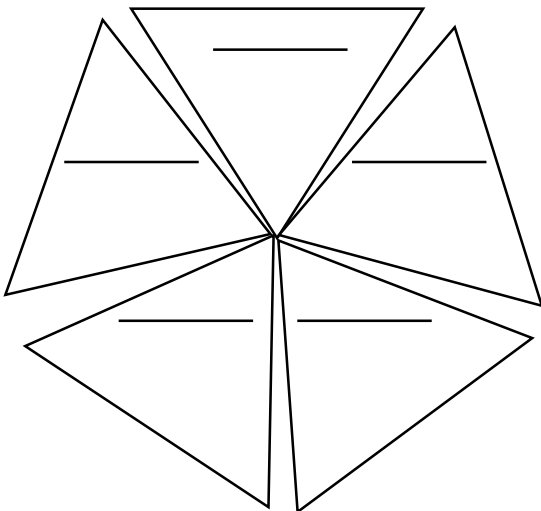
सोंठ — \_\_\_\_\_ सुख — \_\_\_\_\_

(3) 1 से 5 संख्या वाले चित्रों के नाम लिखो और उनके समानार्थी शब्द भी लिखो—

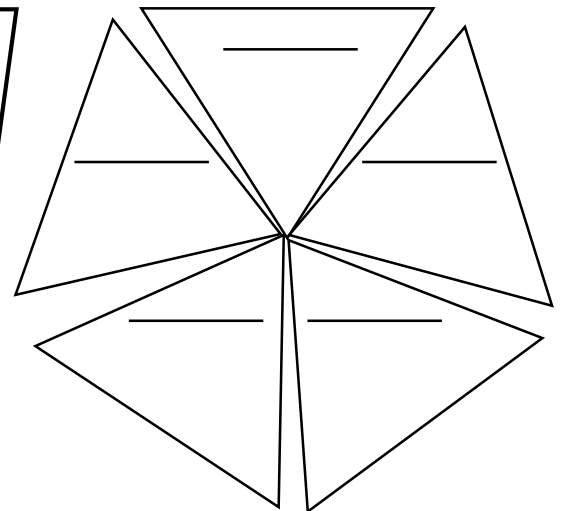
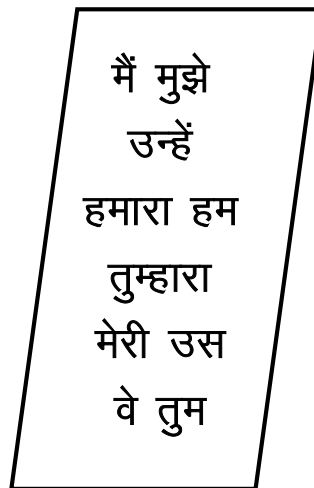


नाम	समानार्थी शब्द
(1) पेड़	_____
(2) _____	_____
(3) _____	_____
(4) _____	_____
(5) _____	_____

(4) दिए गए शब्दों में "अपने लिए" व "दूसरों के लिए" नाम की जगह लिखे जाने वाले शब्दों को अलग-अलग करके फूलों की पत्तियों में लिखो।



अपने लिए



दूसरों के लिए



(8) कोड समझकर पहचानिए और शब्द लिखकर वाक्य बनाइए।

1	2	3	4	5	6	7	8	9	10
ज़ें	ह	ची	में	अ	स	नी	ही	प	ढं

11	12	13	14	15	16	17	18
से	ग	र	चा	ख	नी	ए	हि

--	--	--	--	--	--	--	--

2	4	5	9	7	3	1	6	8

10      12                      11                      13      15      16                      14      18      17

वाक्य —

---



---




---



---

(9) कौन कहाँ है? संज्ञा शब्दों द्वारा रिक्त स्थान भरिए।



शेर / गुफा

---



---



# GWALIOR GLORY SCHOOL

Class : II

## WINTER HOLIDAY HOMEWORK MATHEMATICS (2024-25)

Name : \_\_\_\_\_ Sec. : \_\_\_\_\_ Roll No. : \_\_\_\_\_ Date : \_\_\_\_\_

- (1) Paste the wrappers of any five food items and add their prices to find out the total amount and also write the amount in words. (Paste wrappers on A-4 size sheet or half chart paper).

OR

Draw a digital clock and an analog clock in your Maths notebook and write five differences between digital and analog clock.

- (2) Draw your own pattern with colours, alphabets and numbers.

- (1) Colour 3 numbers to make 10.

1	8	7
4	2	6

- (2) Colour 2 numbers to make 7.

6	3	0
3	5	4

- (3) Find 3 pairs that add up to 12. Use the numbers once- 9, 5, 4, 7, 8, 3

\_\_\_\_\_

- (4) The athletics carnival is held in September. The training started 3 months before.

Which month did the training start? \_\_\_\_\_

- (5) Share 150 between you and your friend. How much amount each of you will get? ₹  each

- (6) Write a number that has no tens or ones. \_\_\_\_\_

- (7) I am a 3 digit number.

My hundreds digit is odd.

My ten digit is more than 6.

I am an even number.

Who am I?

327	416	591
287	306	198
360	670	289

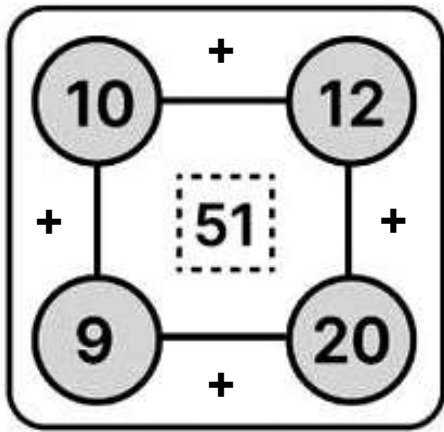
- (8) What number am I?

I am a 2 digit number. I have a zero in the ones place and a 5 in the tens place.

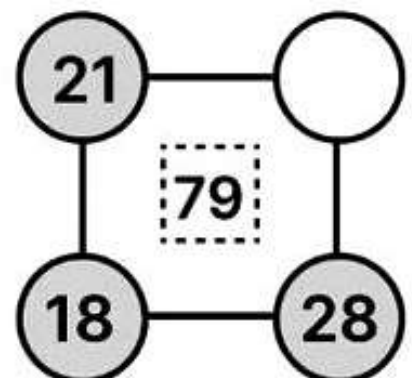
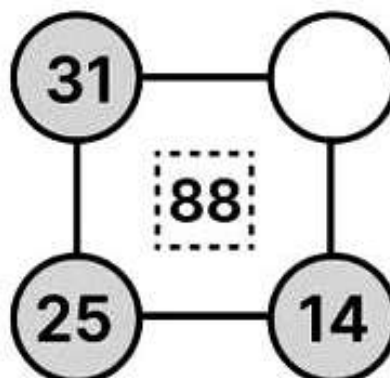
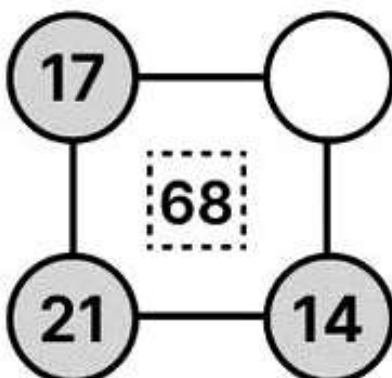
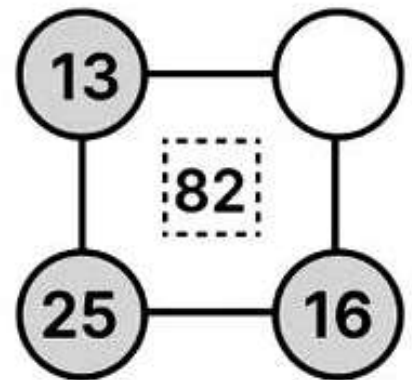
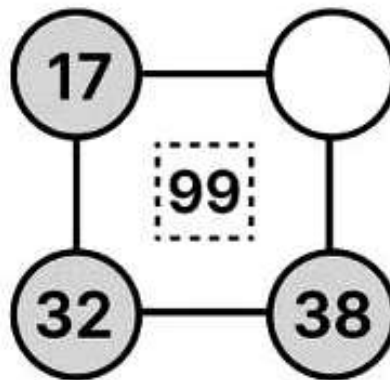
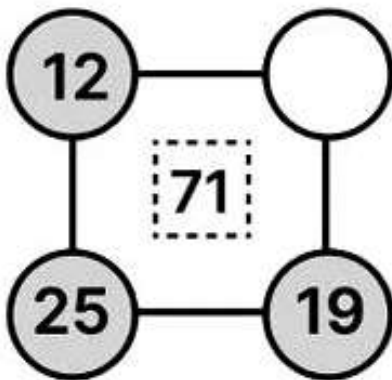
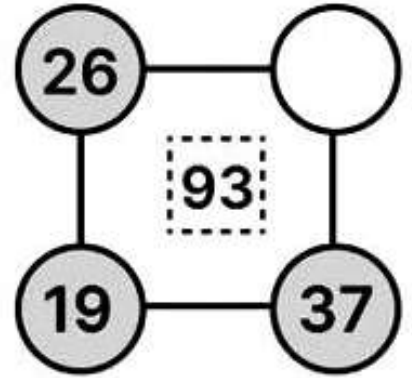
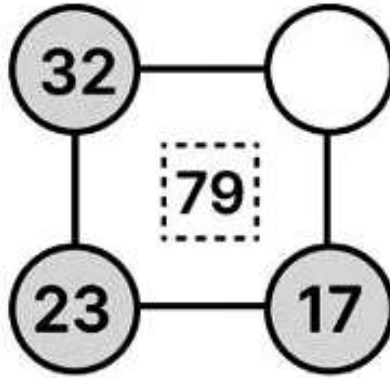
(9) I am a 3 digit number. I have a 5 in the ones place, 3 in the tens place and 1 in the hundreds place.

(10) I am a 2 digit number and I am less than 70. You can divide me by 7. I have 1 in the ones place.

(3) **MATH SQUARES** : Complete the squares with the correct solution.



Example



**(4) RIDDLES AND CODES:**

Use the secret code given below to answer the riddles.

(a) What can run but can't walk?


20   2   12   6   5

(b) What has hands but no arms?

19   17   3   19   1

(c) What is made that can't be seen?

9   3   16   13   6



**(4) RIDDLES AND CODES:**

Use the secret code given below to answer the riddles.

(a) What can run but can't walk?


20   2   12   6   5

(b) What has hands but no arms?

19   17   3   19   1

(c) What is made that can't be seen?

9   3   16   13   6



(d) What goes up and down without ever moving?

13 12 2 16 5 19 2 13 6

(e) What belongs to you but is used more by others?

8 3 7 5 9 2 15 6

(f) What has eyes but can't see?

4 3 12 2 12 3

1	2	3	4	5	6	7	8	9	10	11	12	13	14	15	16	17	18	19	20
K	A	O	P	R	E	U	Y	N	F	H	T	S	D	M	I	L	B	C	W

(d) What goes up and down without ever moving?

13 12 2 16 5 19 2 13 6

(e) What belongs to you but is used more by others?

8 3 7 5 9 2 15 6

(f) What has eyes but can't see?

4 3 12 2 12 3

1	2	3	4	5	6	7	8	9	10	11	12	13	14	15	16	17	18	19	20
K	A	O	P	R	E	U	Y	N	F	H	T	S	D	M	I	L	B	C	W

# GWALIOR GLORY SCHOOL

## WINTER HOLIDAY HOMEWORK EVS (2024-25)

Class : II

Name : \_\_\_\_\_ Sec. : \_\_\_\_\_ Roll No. : \_\_\_\_\_ Date : \_\_\_\_\_

**PROJECT- To be marked for II-Term. Last date to submit the project 11.01.2025.**

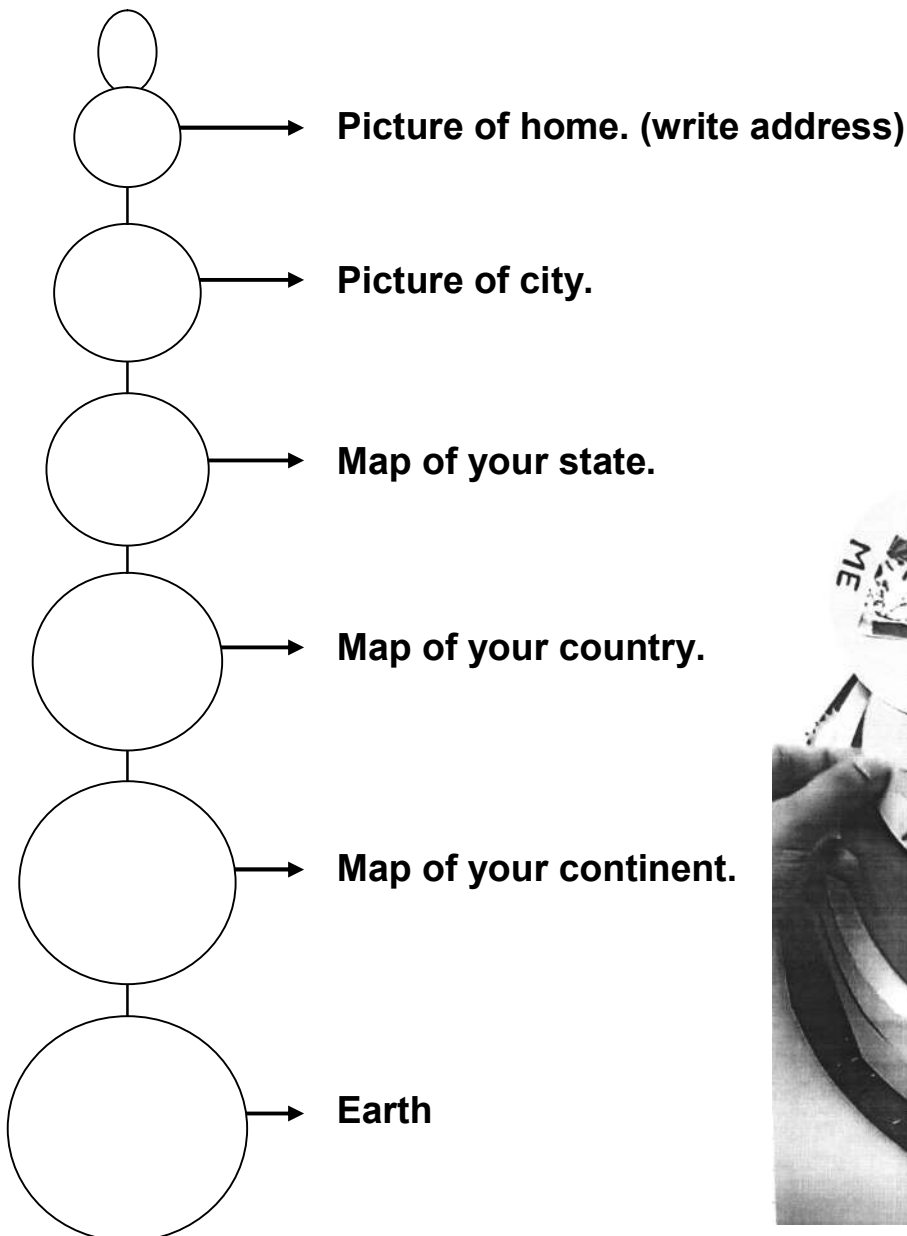
### 1) FIRST AID BOX:-

- ★ Take a box and cover it with white sheet .
- ★ Make a red cross on top of the lid.
- ★ Keep the things kept in the first aid box. Eg: antiseptic cream, antiseptic lotion, bandaid, bandage, pudin hara tablet of fever, thermometer, cotton wool, scissors.


OR

### 2) Make a wall hanging.

- ★ Cut circles of different sizes and paste the pictures as given below:-


















3) Write the names of the following and which parts of the plant is used as food:-



**Name the following:-**




- a) A vegetable that is a flower. \_\_\_\_\_
- b) A fruit that has the same name as a colour. \_\_\_\_\_
- c) Our national fruit. \_\_\_\_\_
- d) A fruit that keeps the doctor away. \_\_\_\_\_

4) **Objects that occur in nature are called natural objects. Objects that are made by man are called man-made objects. Identify the objects as natural or man-made. Put 'N' for natural and 'M' for man-made objects.**

5) States of Matter:

Directions: Cut and paste the word in the correct column.

---

air	table	door	milk	smoke
water	river	steam	rock	apple
juice	brick	tree	wind	rain

# GWALIOR GLORY SCHOOL

## WINTER HOLIDAY HOMEWORK GK (2024-25)

Class : II

Name : \_\_\_\_\_ Sec. : \_\_\_\_\_ Roll No. : \_\_\_\_\_ Date : \_\_\_\_\_

(1) Buy two packets food of your choice and do the following research work:

(a) A Product Research.

Product Name

Manufacturing Date (Mfg)

Expiry Date (Exp)

Maximum Retail Price (MRP)

Manufactured by

Vegetarian  / Non-vegetarian (tick one)

Net Quantity

Ingredients

(b) Packet food comparison–

Take two similar products from different brand and compare them:-

**BRAND NAME-1:** \_\_\_\_\_ **BRAND NAME-2:** \_\_\_\_\_

	Product 1 [ Details ]	Product 2 [ Details ]
Quality	_____	_____
Packaging	_____	_____
Taste	_____	_____
Nutritional Value	_____	_____
Price ₹	_____	_____
Ingredients	_____	_____
Expiry Date (Duration)	_____	_____
Net Quantity	_____	_____



(2) Name and paste the pictures of 5 Indian wildlife sanctuaries and the animals they are known for on A4 size sheet also write two lines about them and mention the places they are located.

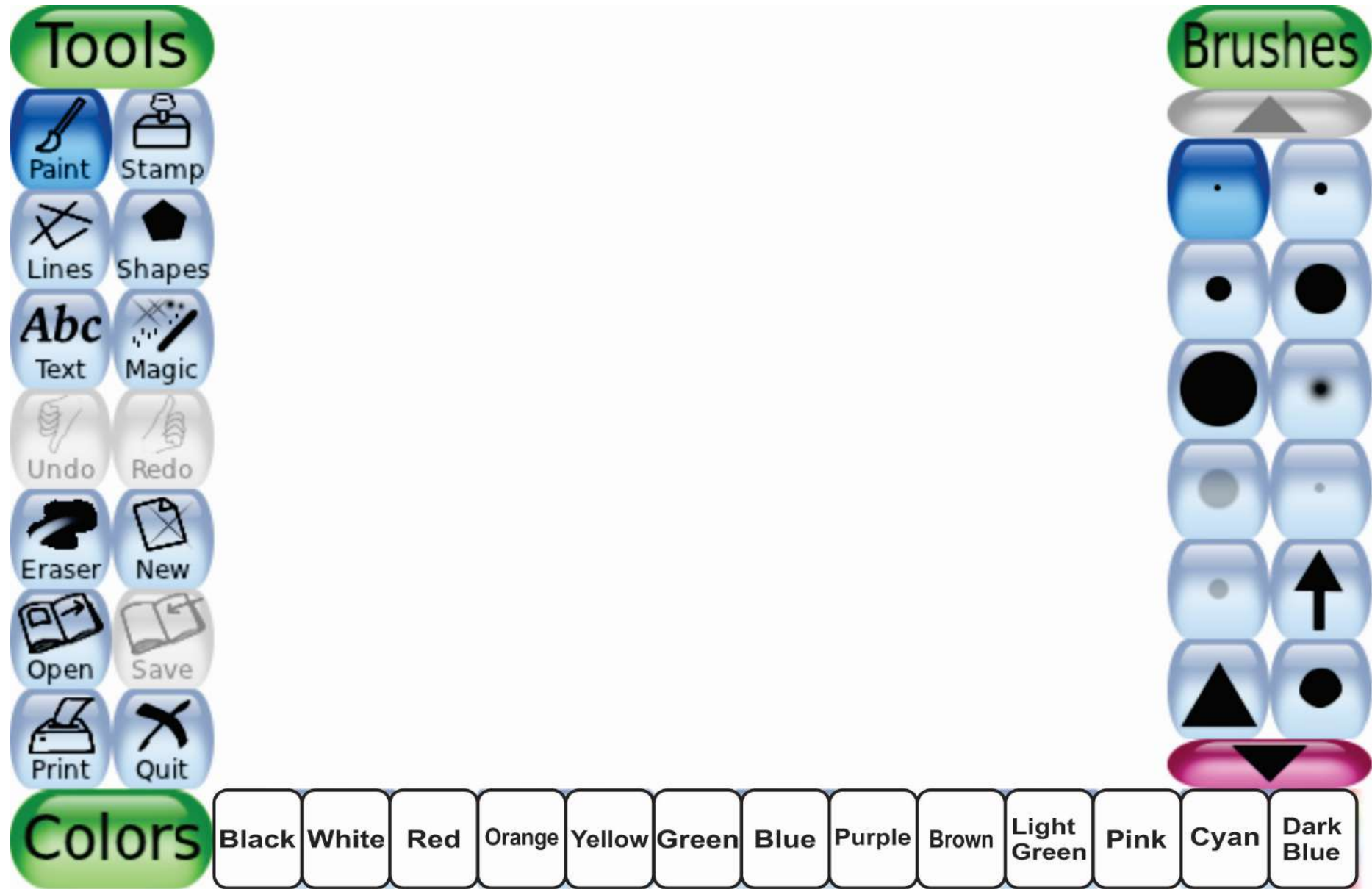
(3) Make a currency chart by mentioning the name of a country, currency, symbol and flag. Choose any (6 countries)

**NOTE: DRAW OR PASTE THE FLAG.**

S.No.	Country	Currency	Symbol	Flag
1.				
2.				
3.				
4.				
5.				
6.				



3) On the given home page of Tux Paint draw a Christmas scene & mention any 6 tools used for drawing the same on Tux Paint.



- 1) \_\_\_\_\_ 2) \_\_\_\_\_ 3) \_\_\_\_\_  
4) \_\_\_\_\_ 5) \_\_\_\_\_ 6) \_\_\_\_\_